

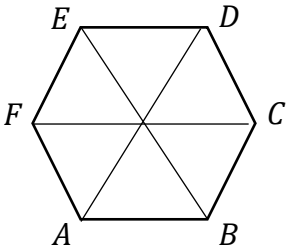
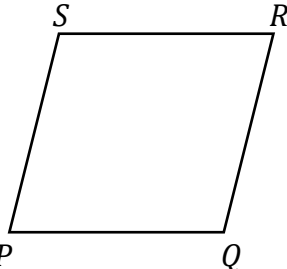


**Modul Pintas Tingkatan 5**

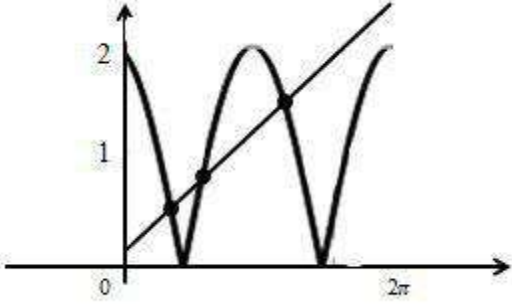
**Peperiksaan Percubaan SPM 2018**

**Skema Jawapan Matematik Tambahan**

**Kertas 2      3472/2**

No				
1	(a)	 <p> <math>OG = OA + AG</math> or  <math>CD = CG + GD</math> </p> <p>(i) <math>a - b + c</math>  (ii) <math>a - 2b + c</math> </p>	K1 N1 N1	
	(b)	 <p> <math>p + q - (2p + 3q) + (4p - q)</math>  <math>-(p + q) + 5p = 4p - q = OR</math>  <math>\therefore PT = OR \Rightarrow PT \parallel OR</math> and <math> PT  =  OR </math> </p> <p>Since <math>PT</math> is parallel to <math>OR</math>, and <math> PT  =  OR </math>, therefore <math>OPTR</math> is a parallelogram.</p>	K1 K1 N1	
				6
2	(a) (i) (ii)	<p>(i) <math>240(1.06)^{20}</math> 770</p> <p>(ii) <math>240(1.06)^n = 2500</math></p> <p><math>\therefore</math> The year in which the population first reached 2500 is 2040.</p>	K1 N1 K1 N1	

	(b)	$\log_{10}q = \log_{10}10 + \log_{10}2 - \log_{10}5^2$ $q = \frac{4}{5}$	K1 N1	6
3		$2(30 - 2x) + 2(y - 2) = 84$ or $(30 - 2x)(y - 2) = 416$ $y = 14 + 2x$  $30(14 + 2x) + 4x - 2x(14 + 2x) = 476$  $x = \frac{-9 \pm \sqrt{9^2 - 4(-1)(-14)}}{2(-1)}$ $x = 7, 2$ $y = 28, 18$	P1  P1  K1  K1  N1 N1	
				6
4	(a)	$y = (1 + x)(1 - x)$ When $y = 0$ , $(1 + x)(1 - x) = 0$ $\therefore x = 1$ or $-1$ $\therefore$ the coordinates of the points are $(1, 0)$ and $(-1, 0)$	N1N1	
	(b)	$\left[ x - \frac{x^3}{3} \right]_{-1}^1$ $\left( 1 - \frac{1}{3} \right) - \left( -1 + \frac{1}{3} \right)$ $\frac{4}{3} \text{unit}^2$	K1  K1  N1	
	(c)	$\pi \left[ x - \frac{2x^3}{3} + \frac{x^5}{5} \right]_{-1}^1$ $\pi \left[ \left( 1 - \frac{2(1)^3}{3} + \frac{(1)^5}{5} \right) - \left( (-1) - \frac{2(-1)^3}{3} + \frac{(-1)^5}{5} \right) \right]$  $\frac{14}{15}\pi$	K1  K1  N1	
				8
5	(a)	(i) $T_1 = a = 0.79$ , $d = 0.025$ $1.24 = 0.79 + (n - 1)0.025$  (ii) $n = 19$	P1 K1  N1	
	(b)	$\frac{19}{2} [2 \times 0.79 + 18 \times 0.025]$ 19.285 m	K1 N1	

	(c)	$\frac{19}{2} [2.16 + 3.24]$ 51.3 zed	K1 N1													
				7												
6	(a)	 <p><math>y = \frac{4x}{3\pi}</math></p> <p>Sketch the straight line, correct axis or y intercept the number of solutions of is 3.</p>	P1 P1 P1 P1 N1 K1 N1	7												
7	(a)															
	(i)	$60^\circ \times \frac{3.142}{180^\circ} \times 10$ 10.47 cm	K1 N1													
	(ii)	$\frac{1}{2} \times 10^2 \times \frac{3.142}{3} - \frac{1}{2} \times 10^2 \sin 60^\circ$ Area of segment ACB = 9.07 cm <sup>2</sup>	KIK1K1 N1													
	(b)	AE = 5 cm Area of $\triangle ABD = \frac{1}{2} \times 10.5 \times 5$ Area of the shaded region ABCD = 26.25 – 9.1 = 17.2 cm <sup>2</sup>	P1 K1 K1 N1													
				10												
8	(a)	<table border="1" data-bbox="359 1467 1204 1585"> <tr> <td><math>\log_{10} p</math></td> <td>0.30</td> <td>0.60</td> <td>0.78</td> <td>0.90</td> <td>1.00</td> </tr> <tr> <td><math>\log_{10} v</math></td> <td>0.35</td> <td>0.50</td> <td>0.59</td> <td>0.65</td> <td>0.70</td> </tr> </table> <p>Refer to graph</p>	$\log_{10} p$	0.30	0.60	0.78	0.90	1.00	$\log_{10} v$	0.35	0.50	0.59	0.65	0.70	N1 N1 3m	
$\log_{10} p$	0.30	0.60	0.78	0.90	1.00											
$\log_{10} v$	0.35	0.50	0.59	0.65	0.70											
	(b)	$m = 0.5$ or $c = 0.2$	P1													
	(i)	$\log_{10} v = 0.5 \log_{10} p + 0.2$	K1													
	(ii)	$v = 1.585 p^{\frac{1}{2}}$	N2													

	(c)	$p = 6.371$	N1	
				10
9	(a)	$p^2 = 4x$ $\therefore P$ is $(\frac{1}{4}p^2, 0)$ Area of $\Delta PQR$ ( $A$ ) = $\frac{1}{2} \times (\frac{1}{4}p^2 - 2) \times p$ $(\frac{1}{8}p^3 - p)$ sq. units $\frac{dA}{dp} = \frac{3p^2}{8} - 1$	K1 N1 K1  N1	
	(b)			
	(i)	$\frac{dA}{dt} = \frac{dA}{dp} \times \frac{dp}{dt}$ $\frac{dA}{dt} = (\frac{3p^2}{8} - 1) \times 0.2$ When $p = 6$ , $\frac{dA}{dt} = (\frac{3}{8} \times 6^2 - 1) \times 0.2$ second $\therefore A$ is increasing at the rate of 2.5 sq. units per second.	K1  K1 N1	
	(ii)	$\delta p = k$ $\delta A = \frac{dA}{dp} \cdot \delta p$ $\delta A = (\frac{3}{8} \times 6^2 - 1) \cdot k$ $\delta A = 12.5k$ sq. units.	P1  K1 N1	
				10
10	(a)		K1	
	(i)	${}^7C_3 \left(\frac{1}{5}\right)^3 \left(\frac{4}{5}\right)^4$  0.1147	N1	
	(ii)	${}^7C_r \left(\frac{4}{5}\right)^r \left(\frac{1}{5}\right)^{7-r}$ Use $P(X=6) + P(X=7)$ $= {}^7C_6 \left(\frac{4}{5}\right)^6 \left(\frac{1}{5}\right)^1 + {}^7C_7 \left(\frac{4}{5}\right)^7 \left(\frac{1}{5}\right)^0$ 0.5767	P1  K1  N1	
	(b)	$\frac{300 - 700}{200}$	K1	
	(i)	0.0228	N1	

	(ii)	$P\left(\frac{300 - 700}{200} < Z < \frac{800 - 700}{200}\right)$	P1	
		0.6687	K1	
	(iii)	$0.6687n = 983$ $n = 1470$	N1	
				10
11	(a)	Gradient of $OA = 2$ $\therefore$ Gradient of $AB$ is $-\frac{1}{2}$ Equation of $AB$ is $y - 8 = -\frac{1}{2}(x - 4)$ $2y + x = 20$ At $B, x = 0, \quad 2y = 20$ $y = 10$ $\therefore B$ is $(0,10)$	K1 N1  N1	
	(b)			
	(i)	Since $OC$ is parallel to $y + 3x = 5$ , $\therefore$ gradient of $OC$ is $y - 0 = -3(x - 0)$ $y = -3x$ Mid-point of $AB = \left(\frac{4+0}{2}, \frac{10+8}{2}\right) = (2,9)$ Equation of the perpendicular bisector of $AB$ is $y - 9 = 2(x - 2)$ $y = 2x + 5$ $2x + 5 = -3x$ $x = -1$ $y = -3(-1) = 3$ $\therefore$ the coordinates of $C$ is $(-1,3)$	K1  P1  K1  K1  N1	
	(ii)	Area of $OABC = \frac{1}{2} \begin{vmatrix} 0 & 4 & 0 & -1 & 0 \\ 0 & 8 & 10 & 3 & 0 \end{vmatrix}$ $\Delta OABC = \frac{1}{2} [(0 + 40 + 0 + 0) - (0 + 0 - 10 + 0)]$ $\Delta OABC = 25$ sq. units.	K1 N1	
				10
12	(a)	$x = \frac{100}{110} \times 5.50$ or $\frac{140}{100} \times 3.50$	K1	
	(i)	RM 5.00	N1	
	(ii)	RM 4.90	N1	
	(b)	$\frac{110(2) + 120(4) + x(3) + 140(1)}{10} = 115.5$ $x = 105$	K1 K1  N1	

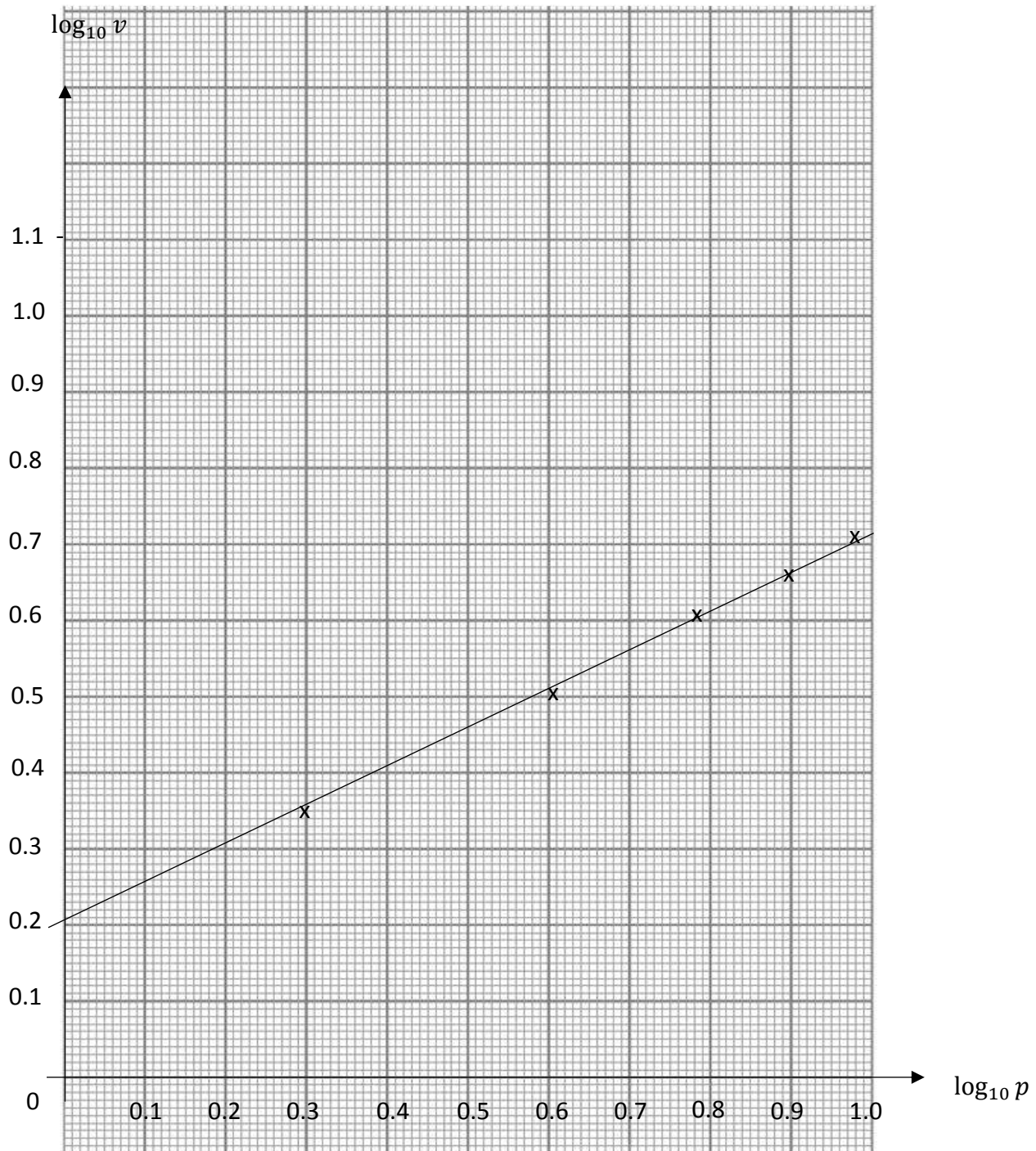
	(c)	$\bar{I} = \frac{121(2) + 120(4) + 99.75(3) + 140(1)}{10}$ 116.1	K1 N1	
	(d)	$x = \frac{116.13}{100} \times 15$ RM 17.42	K1 N1	
				10
13	(a)	I : $x + y \geq 20$ II : $x \leq 2y$ III : $15x + 8y \geq 25$	N1 N1 N1	
	(b)	Refer to Graph 13	K1 N1 N1	
	(c)	(10,10) $8(10)+15(10)$ $200 - *(8(10)+15(10))$ RM 20	N1 K1 K1 N1	
				10
14	(a)			
	(i)	$\frac{\sin C}{11.51} = \frac{\sin 93.16^\circ}{15}$ $C = 50.01^\circ$	K1 N1	
	(ii)	$79.98^\circ$ $EC^2 = 9^2 + 9^2 - 2(9)(9)\cos 79.98^\circ$ $EC = 11.57$	P1 K1 N1	
	(iii)	$\text{Area} = \frac{1}{2}(11.51)(9)\sin(93.16^\circ - *79.98^\circ)$ $= 11.81$	K1 N1	
	(b)	$*79.98^\circ + 93.16^\circ$ $AD^2 = 11.51^2 + 9^2 - 2(11.51)(9)\cos(*79.98^\circ + 93.16^\circ)$ $AD = 20.47$	P1 K1 N1	
				10
15	(a)	Find $t$ when $v = 0$ , $(t - 5)(t - 1) = 0$ $\int_1^5 v dt = \left[ \frac{t^3}{3} - 6\left(\frac{t}{2}\right) + 5t \right]_1^5$ $\left(\frac{1}{3} - 3 + 5\right) - \left(\frac{1}{3}(5)^3 - 3(5)^2 + 5(5)\right)$ $\therefore$ the distance $AB = \frac{7}{3} + \frac{25}{3} = \frac{32}{3}$	K1 K1 K1 N1	





Question 8

$\log_{10} p$	0.30	0.60	0.78	0.90	1.00
$\log_{10} v$	0.35	0.50	0.59	0.65	0.70



One *straight line drawn correctly	K1
All * straight lines drawn correctly	N1
Correct Region	N1

